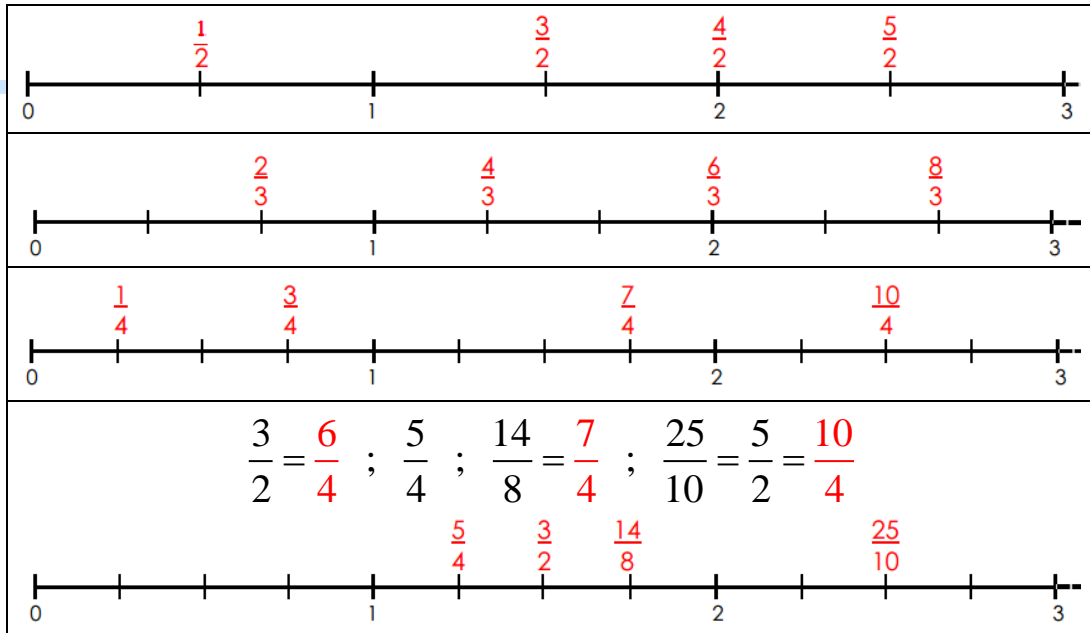
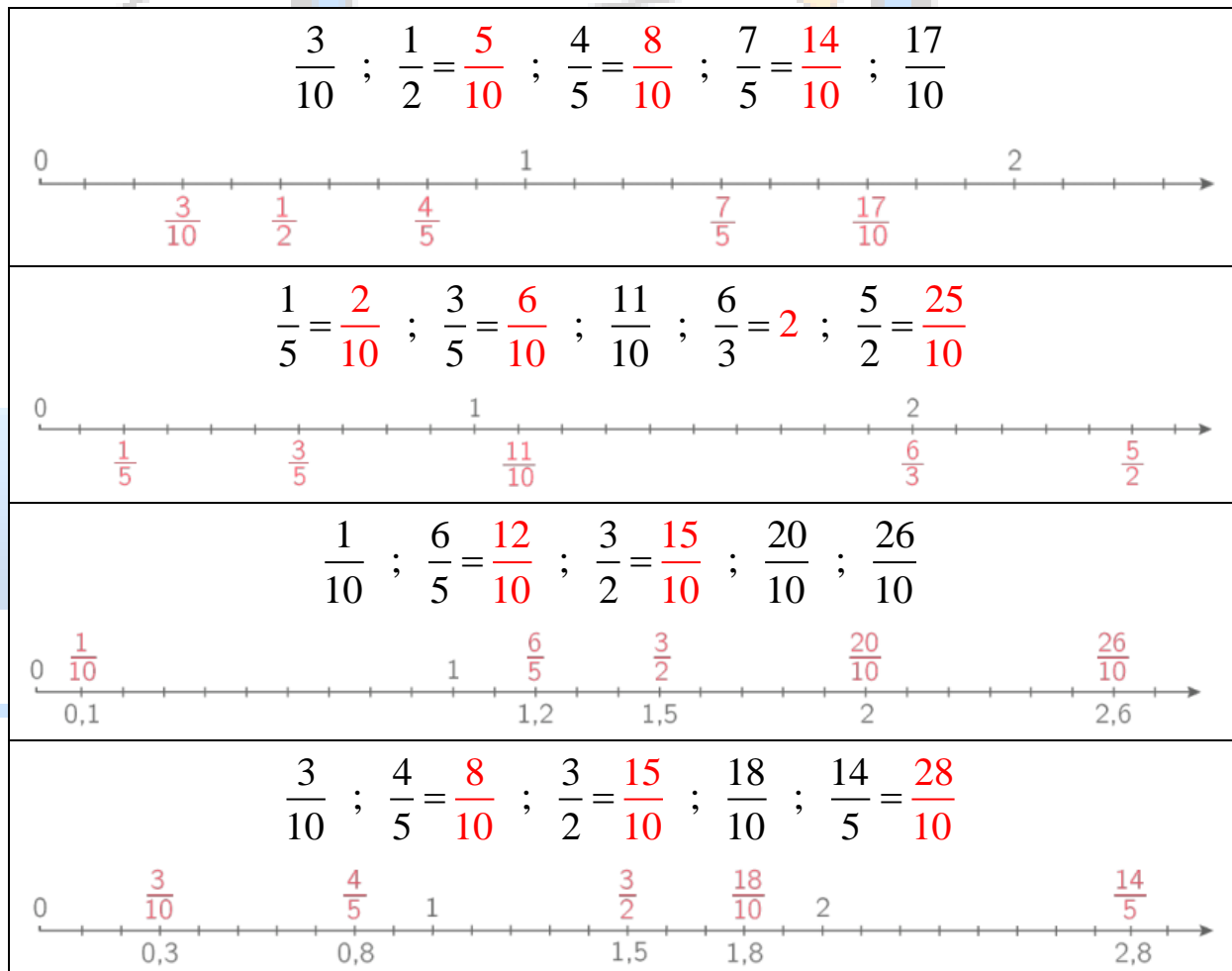


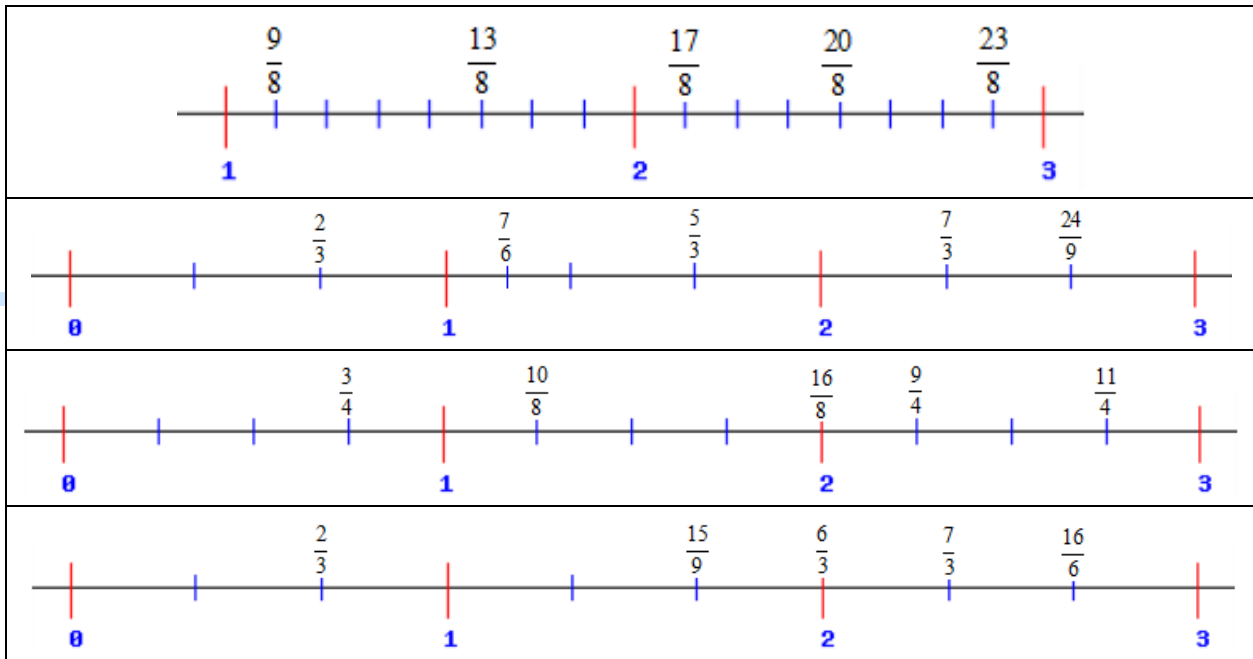
حلول تمارين درس الكتابات الكسرية -2-(3) حاصل القسمة ونصف المستقيم المدرج:3.1. وضع نقطة على نصف مستقيم مدرج:حل التمرين 1:

$$\frac{3}{2} = \frac{6}{4} ; \frac{5}{4} ; \frac{14}{8} = \frac{7}{4} ; \frac{25}{10} = \frac{5}{2} = \frac{10}{4}$$

حل التمرين 2:

$$\frac{3}{10} ; \frac{4}{5} = \frac{8}{10} ; \frac{3}{2} = \frac{15}{10} ; \frac{18}{10} ; \frac{14}{5} = \frac{28}{10}$$

حل التمرين 3:

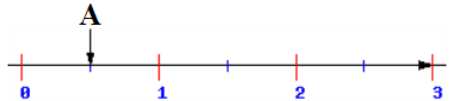
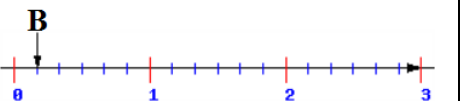
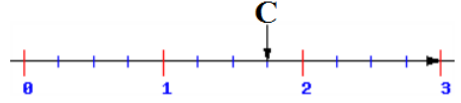

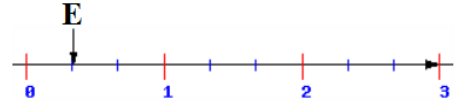
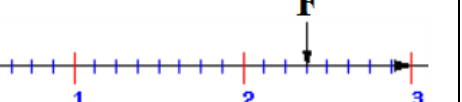
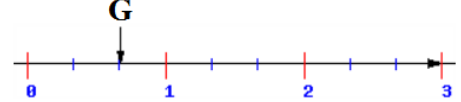
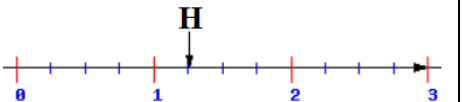


حل التمرين 4:

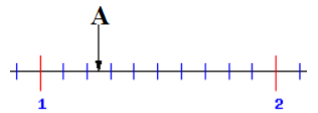

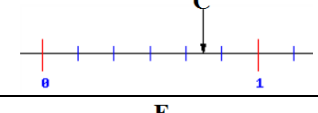
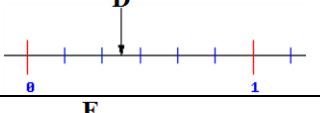
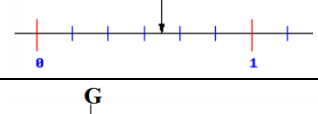
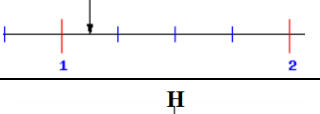
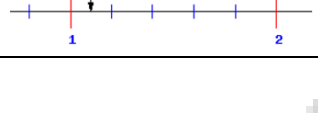
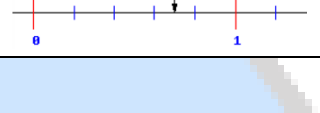
	A $\left(\frac{5}{6}\right)$		B $\left(\frac{1}{5}\right)$
	C $\left(\frac{9}{4}\right)$		D $\left(\frac{6}{5}\right)$
	E $\left(\frac{25}{6}\right)$		F $\left(\frac{10}{7}\right)$
	G $\left(\frac{5}{2}\right)$		H $\left(\frac{1}{9}\right)$
	I $\left(\frac{16}{5}\right)$		J $\left(\frac{17}{12}\right)$

3.2. إيجاد فاصلة نقطة على نصف مستقيم مدرج:



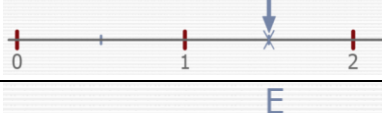
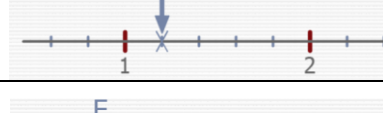


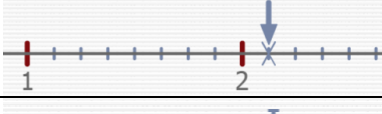



حل التمرين 1:

	$A\left(\frac{1}{2}\right)$		$B\left(\frac{1}{6}\right)$
	$C\left(\frac{7}{4}\right)$		$D\left(\frac{5}{6}\right)$
	$E\left(\frac{1}{3}\right)$		$F\left(\frac{11}{8}\right)$
	$G\left(\frac{2}{3}\right)$		$H\left(\frac{5}{4}\right)$

حل التمرين 2:

	$A\left(\frac{12,5}{10}\right) = A\left(\frac{23}{20}\right)$		$B\left(\frac{1,5}{6}\right) = B\left(\frac{3}{12}\right)$
	$C\left(\frac{4,5}{6}\right) = C\left(\frac{9}{12}\right)$		$D\left(\frac{2,5}{6}\right) = D\left(\frac{5}{12}\right)$
	$E\left(\frac{3,5}{6}\right) = E\left(\frac{7}{12}\right)$		$F\left(\frac{4,5}{4}\right) = F\left(\frac{9}{8}\right)$
	$G\left(\frac{6,5}{6}\right) = G\left(\frac{13}{12}\right)$		$H\left(\frac{3,5}{5}\right) = H\left(\frac{7}{10}\right)$

حل التمرين 3:

	$A\left(\frac{3}{5}\right)$		$B\left(\frac{5}{8}\right)$
	$C\left(\frac{3}{2}\right)$		$D\left(\frac{6}{5}\right)$
	$E\left(\frac{17}{6}\right)$		$F\left(\frac{6}{7}\right)$
	$G\left(\frac{17}{8}\right)$		$H\left(\frac{13}{9}\right)$
	$I\left(\frac{27}{10}\right)$		$J\left(\frac{17}{12}\right)$